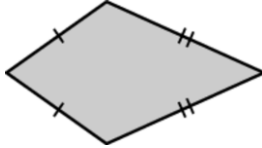


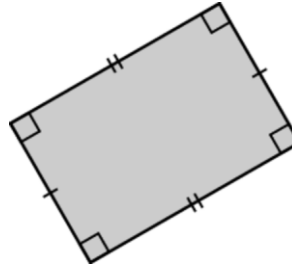
## 7.4 Practice A

Classify the quadrilateral.

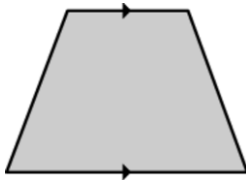
1.



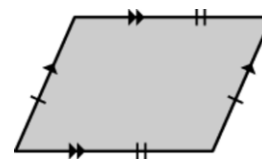
2.



3.

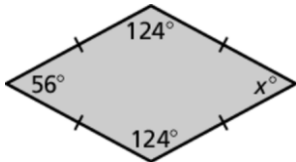


4.

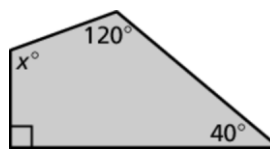


Find the value of  $x$ .

5.



6.



Copy and complete using *always*, *sometimes*, or *never*.

7. A square is   ?   a rhombus.
8. A parallelogram is   ?   a rectangle.
9. A kite is   ?   a square.
10. A trapezoid is   ?   a square.
11. Draw the following trapezoids. If it is not possible, explain why.
  - a. a trapezoid with one right angle
  - b. a trapezoid with two right angles
  - c. a trapezoid with three right angles
  - d. a trapezoid with four right angles